

last name

first name

signature

1											18						
1 H 1.008											2 He 4.003						
3 Li 6.941	4 Be 9.012											5 B 10.81	6 C 12.01	7 N 14.01	8 O 16.00	9 F 19.00	10 Ne 20.18
11 Na 22.99	12 Mg 24.31											13 Al 26.98	14 Si 28.09	15 P 30.97	16 S 32.07	17 Cl 35.45	18 Ar 39.95
19 K 39.10	20 Ca 40.08	21 Sc 44.96	22 Ti 47.87	23 V 50.94	24 Cr 52.00	25 Mn 54.94	26 Fe 55.85	27 Co 58.93	28 Ni 58.69	29 Cu 63.55	30 Zn 65.38	31 Ga 69.72	32 Ge 72.64	33 As 74.92	34 Se 78.96	35 Br 79.90	36 Kr 83.80
37 Rb 85.47	38 Sr 87.62	39 Y 88.91	40 Zr 91.22	41 Nb 92.91	42 Mo 95.94	43 Tc (98)	44 Ru 101.07	45 Rh 102.91	46 Pd 106.42	47 Ag 107.87	48 Cd 112.41	49 In 114.82	50 Sn 118.71	51 Sb 121.76	52 Te 127.60	53 I 126.90	54 Xe 131.29
55 Cs 132.91	56 Ba 137.33	57 La 138.91	72 Hf 178.49	73 Ta 180.95	74 W 183.84	75 Re 186.21	76 Os 190.23	77 Ir 192.22	78 Pt 195.08	79 Au 196.97	80 Hg 200.59	81 Tl 204.38	82 Pb 207.20	83 Bi 208.98	84 Po (209)	85 At (210)	86 Rn (222)
87 Fr (223)	88 Ra (226)	89 Ac (227)	104 Rf (267)	105 Db (268)	106 Sg (269)	107 Bh (270)	108 Hs (270)	109 Mt (278)	110 Ds (281)	111 Rg (282)	112 Cn (285)	113 Nh (286)	114 Fl (289)	115 Mc (290)	116 Lv (293)	117 Ts (294)	118 Og (294)

58 Ce 140.12	59 Pr 140.91	60 Nd 144.24	61 Pm (145)	62 Sm 150.36	63 Eu 151.96	64 Gd 157.25	65 Tb 158.93	66 Dy 162.50	67 Ho 164.93	68 Er 167.26	69 Tm 168.93	70 Yb 173.04	71 Lu 174.97
90 Th 232.04	91 Pa 231.04	92 U 238.03	93 Np (237)	94 Pu (244)	95 Am (243)	96 Cm (247)	97 Bk (247)	98 Cf (251)	99 Es (252)	100 Fm (257)	101 Md (258)	102 No (259)	103 Lr (266)

constants

$R = 0.08206 \text{ L atm/mol K}$

$R = 8.314 \text{ J/mol K}$

$N_A = 6.022 \times 10^{23} / \text{mol}$

$h = 6.626 \times 10^{-34} \text{ J}\cdot\text{s}$

$c = 3.00 \times 10^8 \text{ m/s}$

$g = 9.81 \text{ m/s}^2$

conversions

$1 \text{ atm} = 760 \text{ torr}$

$1 \text{ atm} = 101325 \text{ Pa}$

$1 \text{ atm} = 1.01325 \text{ bar}$

$1 \text{ bar} = 10^5 \text{ Pa}$

$^{\circ}\text{F} = ^{\circ}\text{C}(1.8) + 32$

$\text{K} = ^{\circ}\text{C} + 273.15$

conversions

$1 \text{ in} = 2.54 \text{ cm}$

$1 \text{ ft} = 12 \text{ in}$

$1 \text{ yd} = 3 \text{ ft}$

$1 \text{ mi} = 5280 \text{ ft}$

$1 \text{ lb} = 453.6 \text{ g}$

$1 \text{ ton} = 2000 \text{ lbs}$

$1 \text{ tonne} = 1000 \text{ kg}$

$1 \text{ gal} = 3.785 \text{ L}$

$1 \text{ gal} = 231 \text{ in}^3$

$1 \text{ gal} = 128 \text{ fl oz}$

$1 \text{ fl oz} = 29.57 \text{ mL}$

water data

$C_{s,\text{ice}} = 2.09 \text{ J/g } ^{\circ}\text{C}$

$C_{s,\text{water}} = 4.184 \text{ J/g } ^{\circ}\text{C}$

$C_{s,\text{steam}} = 2.03 \text{ J/g } ^{\circ}\text{C}$

$\rho_{\text{water}} = 1.00 \text{ g/mL}$

$\rho_{\text{ice}} = 0.9167 \text{ g/mL}$

$\rho_{\text{seawater}} = 1.024 \text{ g/mL}$

$\Delta H_{\text{fus}} = 334 \text{ J/g}$

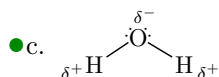
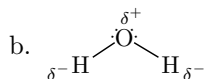
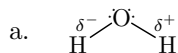
$\Delta H_{\text{vap}} = 2260 \text{ J/g}$

$K_w = 1.0 \times 10^{-14}$

This exam should have exactly 20 questions. Each question is equally weighted at 5 points each. You will enter your answer choices on the virtual bubbleseet after you have finished. Your score is based on what you submit on the virtual bubblesheet and not what is circled on the exam.

---

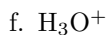
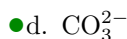
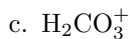
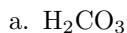
1. Which of the three structures for water is correctly showing the partial charges?



**Explanation:** The partial positives go on the H's because it has a lower electronegativity value than O. Oxygen is very electronegative.

---

2. What is the conjugate base of hydrogen carbonate (bicarbonate),  $\text{HCO}_3^-$ ?



**Explanation:** Remove ONE proton and get  $\text{CO}_3^{2-}$  which is carbonate.

---

3. Strontium hydroxide is typically used to extract sugar molecules from concentrated solutions such as molasses. What is the pH of a 0.00038 M  $\text{Ba}(\text{OH})_2$  aqueous solution?

a. 11.58

b. 3.42

c. 3.12

d. 10.58

● e. 10.88

**Explanation:** 0.00038 M barium hydroxide is a strong base that dissociates completely, resulting in a 0.00076 M hydroxide ion concentration.

$$\text{pOH} = -\log(0.00076) = 3.12$$

$$\text{pH} = 14 - \text{pOH} = 14 - 3.12 = 10.88$$


---

4. According to the Lowry-Bronsted Theory of acids and bases, an acid is:

a. an electron acceptor.

b. a substance which when dissolved in water yields hydroxide ions.

c. a proton acceptor.

● d. a proton donor.

e. an electron donor.

**Explanation:** All Lowry-Bronsted acids are proton donors.

---

5. Calculate the molarity of  $[\text{OH}^-]$  when 56.0 grams of NaOH (40.0 g/mol) are fully dissolved in a 16.0 L solution.

- a. 0.0722 M
- b. 0.0667 M
- c. 0.875 M
- d. 0.0875 M
- e. 0.0446 M
- f. 3.50 M

**Explanation:** Convert grams to moles and then divide to solve for molarity.

$$56 \text{ g} / (40 \text{ g/mol}) = 1.4 \text{ mol}$$

$$1.4 \text{ mol} / 16.0 \text{ L} = 0.0875 \text{ M}$$

6. Each of the following acids are mixed at the same concentration of 0.072 mol/L. Which one will give the most acidic solution?

name	$K_a$
butanoic acid	$1.5 \times 10^{-5}$
hydrofluoric acid	$6.3 \times 10^{-4}$
hypochlorous acid	$3.5 \times 10^{-8}$
propanoic acid	$1.3 \times 10^{-5}$
lactic acid	$1.4 \times 10^{-4}$

- a. lactic acid
- b. butanoic acid
- c. hypochlorous acid
- d. hydrofluoric acid
- e. propanoic acid

**Explanation:** The larger the value of  $K$ , the more products are formed and the stronger the acid. The highest  $K_a$  is hydrofluoric acid, which is  $K_a = 6.3 \times 10^{-4}$ . This will yield the most acid solution because more hydronium ion will be formed as a product.

7. A titration experiment is set up to fully neutralize a 50 mL weak acid solution using the strong base, NaOH. After adding 15.1 mL 0.0463 M NaOH, the solution turns from clear to pink and you know that your titration is complete. How many **moles** of acid were present in the initial weak acid solution?

- a. 0.0200 moles
- b.  $6.99 \times 10^{-4}$  moles
- c. 0.151 moles
- d.  $7.55 \times 10^{-3}$  moles
- e.  $1.51 \times 10^{-8}$  moles

**Explanation:** The number of moles of both the acid and the base at the equivalence point is the concentration of the titrant times the volume added in liters.

$$0.0463(0.151) = 6.99 \times 10^{-4}$$

8. Which of the following species has the smallest value for  $K_a$ ?

- a. HI
- b. HF
- c.  $\text{HClO}_3$
- d.  $\text{HClO}_4$
- e. HCl

**Explanation:** Everything listed *except* HF is a strong acid... So the HF will definitely have the smallest value of  $K_a$  because it is the only weak acid listed.

9. What is a role of limestone (calcium carbonate,  $\text{CaCO}_3$ ) in lakes that is beneficial for aquatic life?

- a. dissolved limestone can increase the pH of lakes by acting like a strong acid
- b. dissolved limestone will lower the pH to make lakes acidic
- c. dissolved limestone can resist large changes in pH from artificial sources, such as chemical leaks and acid rain
- d. limestone can increase the pH of lakes by acting like a strong base

**Explanation:** Calcium carbonate protects from large pH changes by creating a buffer system.

10. A sample of 100 mL of a weak acid (HA) solution was completely neutralized in a titration experiment with 27.4 mL of 0.0555 M KOH. What is the concentration of the original HA solution?

- a. 0.0215 M
- b. 0.0152 M
- c. 0.203 M
- d. 0.0555 M
- e. 0.0175 M

**Explanation:** Complete neutralization occurs at the equivalence point of a titration and this is where

$$M_A \cdot V_A = M_B \cdot V_B$$

$$M_A \cdot 100 \text{ mL} = 0.0555 \text{ M} \cdot 27.4 \text{ mL}$$

$$M_A = 0.0152 \text{ M}$$

11. A 0.024 M solution of  $\text{HNO}_3$  is diluted 100:1 with water (to be clear, that is 1 part acid to 99 parts water). What is the pH of the diluted acid solution?

- a. 1.26
- b. 3.62
- c. 1.62
- d. 4.26
- e. 2.62
- f. 3.26

**Explanation:** The 100:1 dilution makes the concentration 100× less concentrated or 0.00024 M.  $\text{HNO}_3$  is a strong acid that dissociates completely, resulting in a 0.00024 M hydrogen ion concentration. Now do the pH math

$$\text{pH} = -\log(0.00024) = 3.62$$

12. A weak base, B, undergoes a 13% ionization when mixed at a concentration of 0.31 M. What is the value of  $K_b$  for this weak base?

- a.  $2.8 \times 10^{-4}$
- b.  $6.5 \times 10^{-4}$
- c.  $7.2 \times 10^{-5}$
- d.  $6.0 \times 10^{-3}$
- e.  $5.1 \times 10^{-3}$

**Explanation:** For weak base B, :

$$K_b = \frac{[\text{OH}^-][\text{BH}^+]}{[\text{B}]}$$

Amount ionized is 13% of 0.31 = 0.0403 M which is equal to the  $[\text{OH}^-]$  and the  $[\text{BH}^+]$  concentrations. The B concentration just drops by that amount which makes it 0.2697 M. Now just plug them all in...

$$K_b = \frac{0.0403^2}{0.2697}$$

$$K_b = 6.0218 \times 10^{-3}$$

with 2 sig figs this is  $6.0 \times 10^{-3}$

13. Which of the following compounds would be the least likely to dissolve in water?

- a.  $\text{CH}_3\text{OH}$
- b.  $\text{CH}_3\text{CH}_2\text{CH}_3$
- c.  $\text{KNO}_3$
- d.  $\text{RbOH}$

**Explanation:** Polar/ionic solvents dissolve polar/ionic solutes and non-polar solvents dissolve non-polar solutes. Water is a polar solvent,  $\text{KNO}_3$  and  $\text{RbOH}$  are ionic compounds and  $\text{CH}_3\text{OH}$  (methanol) is polar (note the OH group).  $\text{CH}_3\text{CH}_2\text{CH}_3$  is propane and is very non-polar which prevents it from having any substantial solubility in water. A simple rule of thumb is “likes dissolves likes”.

14. Which pH represents a solution with 1000 times higher hydroxide ion concentration than a solution with a pH of 8?

- a. pH = 10
- b. pH = 11
- c. pH = 7
- d. pH = 12
- e. pH = 5
- f. pH = 6

**Explanation:** By using a logarithmic scale, a 1000 times difference indicates a difference of 3 orders of magnitude (pH units). Given this, a solution with 1000 times higher  $[\text{OH}^-]$  concentration means that the solution is more basic by 3 pH units, so  $8 + 3 = \text{pH } 11$ .

15. A weak acid, HX, ionizes 7.8% at a 0.077 M concentration. What is the pH of this solution?

- a. 1.11
- b. 2.33
- c. 1.22
- d. 3.33
- e. 2.22

**Explanation:** Percent ionization gives you the dissociation of a weak electrolyte at a particular concentration:

$$[\text{H}^+] = 0.077 \times 0.078 \text{ M}$$

$$[\text{H}^+] = 0.006006 \text{ M}$$

$$\text{pH} = -\log(0.006006) = 2.2214 = 2.22 \text{ (2 sig fig)}$$

16. The pH of a solution is measured to be 9.15. What is the concentration of hydroxide in this solution?

- a.  $7.1 \times 10^{-10} \text{ M}$
- b.  $3.2 \times 10^{-5} \text{ M}$
- c.  $1.4 \times 10^{-5} \text{ M}$
- d.  $4.2 \times 10^{-6} \text{ M}$
- e.  $3.1 \times 10^{-10} \text{ M}$

**Explanation:** Convert to pOH and then to the concentration of hydroxide.

$$\text{pOH} = 14 - 9.15 = 3.85$$

$$[\text{OH}^-] = 10^{-3.85} = 1.4125 \times 10^{-5} \text{ M}$$

17. A 6.00 gram sample of  $\text{KNO}_3$  is dissolved into 34.0 grams of water. What is the percent concentration (by mass) of this solution?

- a. 12.5%
- b. 15.0%
- c. 20.0%
- d. 18.6%
- e. 17.6%

**Explanation:** Total mass is 40 grams.

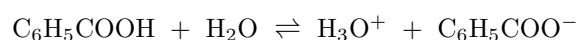
$$\% \text{conc} = 6/40 \times 100 = 15\%$$

18. Which two strong acids are the most likely candidates to be found in acid rain?

- a.  $\text{H}_2\text{SO}_4$  and  $\text{HNO}_3$
- b.  $\text{H}_2\text{S}$  and  $\text{NH}_2$
- c.  $\text{H}_2\text{SO}_4$  and  $\text{H}_3\text{PO}_4$
- d.  $\text{HNO}_3$  and  $\text{H}_2\text{CO}_3$
- e.  $\text{H}_2\text{SO}_3$  and  $\text{HNO}_2$

**Explanation:** Sulfur and nitrogen oxides react with water droplets and make sulfuric acid and nitric acid,  $\text{H}_2\text{SO}_4$  and  $\text{HNO}_3$ .

19. Consider the following reaction:



Which of the following pairs are conjugate pairs?

- I.  $\text{H}_3\text{O}^+$  and  $\text{H}_2\text{O}$
  - II.  $\text{C}_6\text{H}_5\text{COOH}$  and  $\text{H}_3\text{O}^+$
  - III.  $\text{C}_6\text{H}_5\text{COOH}$  and  $\text{H}_2\text{O}$
  - IV.  $\text{C}_6\text{H}_5\text{COOH}$  and  $\text{C}_6\text{H}_5\text{COO}^-$
  - V.  $\text{H}_2\text{O}$  and  $\text{C}_6\text{H}_5\text{COO}^-$
- a. II and V
  - b. IV only
  - c. V only
  - d. III and V
  - e. I and IV

f. I only

**Explanation:**  $\text{C}_6\text{H}_5\text{COOH}$  is a weak acid, so its conjugate is the base  $\text{C}_6\text{H}_5\text{COO}^-$  and thus it is a pair (IV). Plus, water  $\text{H}_2\text{O}$ , acts as a weak base accepting a proton to form hydronium ion,  $\text{H}_3\text{O}^+$  which is the other conjugate pair (I).

20. Below is a list of just three indicators and the pH transition range in which they change from one color to another. Which indicator would be the best one to use for the titration of a strong acid and strong base?

- a. thymolphthalein, 9.3 to 10.5
- b. bromocresol green, 3.8 to 5.4
- c. bromothymol blue, 6.1 to 7.6

**Explanation:** For a titration of a strong acid and strong base, the equivalence point will be at a pH of approximately 7. Bromothymol blue in this listing covers that pH during the color transition. The other two are well out of range.

---

After you are finished and have all your answers circled, go to the front of the room and then use the QR code show below to pull up the virtual answer page for your exam. Enter the appropriate info plus all your answers - click the SUBMIT button. Double check your choices on the next page. Once your are sure, click the submit button on that page to enter your answers. Make sure you get the confirmation screen (different background color!) and show it to the TA or proctor. After that, turn in your exam and scratch paper. You're free to leave after that.



<https://mccord.cm.utexas.edu/zinc>

\* \* \* Remember your Version Number \* \* \*