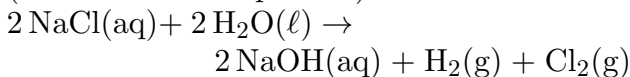


This print-out should have 24 questions. Multiple-choice questions may continue on the next column or page – find all choices before answering.

001 10.0 points

How many moles of $\text{Cl}_2(\text{g})$ are produced by the electrolysis of concentrated sodium chloride if 2.00 A are passed through the solution for 4.00 hours? The equation for this process (the “chloralkali” process) is



1. 0.00248 mol
2. 0.298 mol
3. 0.447 mol
4. 0.149 mol
5. 0.0745 mol

002 10.0 points

A steel surface has been electroplated with 5.10 g of vanadium (V, molar mass = 51 g/mol). If 2.90×10^4 C of charge were used, what was the original oxidation number of V?

1. +5
2. +2
3. +1
4. +6
5. +4
6. +3

003 10.0 points

How long will it take to deposit 0.00235 moles of gold by the electrolysis of $\text{KAuCl}_4(\text{aq})$ using a current of 0.214 amperes?

1. 17.7 min

2. 106 min
3. 26.5 min
4. 70.7 min
5. 53.0 min

004 10.0 points

Consider 3 electrolysis experiments:

The first: 1 Faraday of electricity is passed through a solution of AgNO_3 .

The second: 2 Faradays of electricity are passed through a solution of $\text{Zn}(\text{NO}_3)_2$.

The third: 3 Faradays of electricity are passed through a solution of $\text{Bi}(\text{NO}_3)_3$.

1. Equal numbers of moles of all three metals are produced.
2. The reaction producing the smallest mass of metal is that of the silver solution.
3. Equal masses of all three metals are produced.
4. Twice as many moles of metallic zinc are produced than metallic silver.

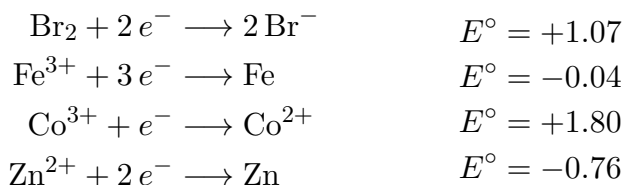
005 10.0 points

Sodium is produced by electrolysis of molten sodium chloride. What are the products at the anode and cathode, respectively?

1. $\text{O}_2(\text{g})$ and $\text{Na}(\ell)$
2. $\text{Cl}^-(\text{aq})$ and $\text{Na}_2\text{O}(\ell)$
3. $\text{Na}(\ell)$ and $\text{O}_2(\text{g})$
4. $\text{Cl}_2(\text{g})$ and $\text{Na}(\ell)$
5. $\text{Cl}_2(\text{g})$ and $\text{Na}_2\text{O}(\ell)$

006 10.0 points

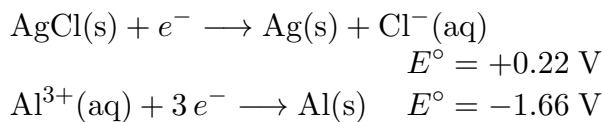
What is the standard cell potential of the strongest battery that could be made using these half reactions?



1. 1.84
2. 1.03
3. 1.04
4. 2.56
5. 1.11
6. 1.83

007 10.0 points

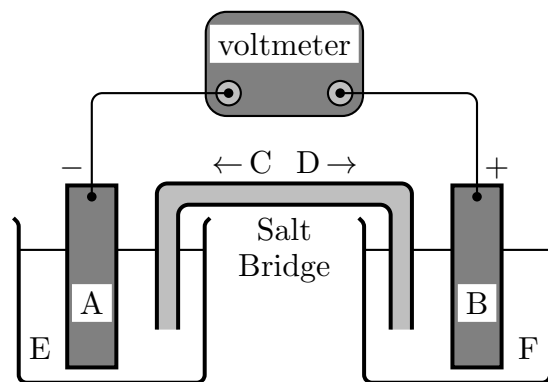
What would be the standard potential of an electrolytic cell constructed with the following half reactions?



1. -1.88
2. -1.44
3. 1.88
4. 1.44

008 (part 1 of 3) 10.0 points

The galvanic cell below uses the standard half-cells $\text{Mg}^{2+} | \text{Mg}$ and $\text{Zn}^{2+} | \text{Zn}$, and a salt bridge containing $\text{KCl}(\text{aq})$. The voltmeter gives a positive voltage reading.



Identify A and write the half-reaction that occurs in that compartment.

1. $\text{Mg(s)}; \text{Mg(s)} \rightarrow \text{Mg}^{2+}(\text{aq}) + 2e^-$
2. $\text{Mg(s)}; \text{Mg}^{2+}(\text{aq}) + 2e^- \rightarrow \text{Mg(s)}$
3. $\text{Zn(s)}; \text{Zn}^{2+}(\text{aq}) + 2e^- \rightarrow \text{Zn(s)}$
4. $\text{Zn(s)}; \text{Zn(s)} \rightarrow \text{Zn}^{2+}(\text{aq}) + 2e^-$

009 (part 2 of 3) 10.0 points

What happens to the size of the electrode A during the operation of the cell?

1. decreases
2. increases
3. No change

010 (part 3 of 3) 10.0 points

What is the voltmeter reading?

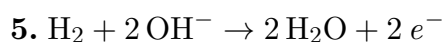
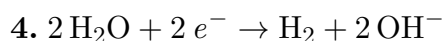
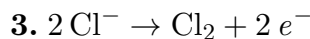
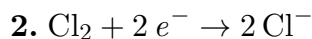
1. +0.50 V
2. +3.40 V
3. +1.60 V
4. +2.50 V
5. +4.30 V

011 10.0 points

The electrolysis of an aqueous sodium chloride solution using inert electrodes produces

gaseous chlorine at one electrode. At the other electrode gaseous hydrogen is produced and the solution becomes basic around the electrode. What is the equation for the cathode half-reaction in the electrolytic cell?

1. None of the other answers listed is correct.



012 10.0 points

What is the E_{cell}° of



1. +0.85

2. -0.85

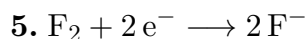
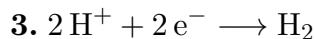
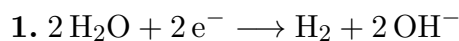
3. -2.37

4. +2.37

5. +1.61

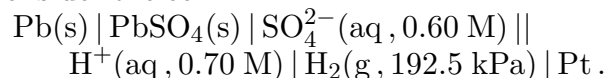
013 10.0 points

Standard reduction potentials are established by comparison to the potential of which half reaction?



014 10.0 points

Consider the cell



If E° for the cell is 0.36 V at 25°C, write the Nernst equation for the cell at this temperature.

1. $E = 0.36 - 0.01285 \ln \left[\frac{1.90}{(0.70)(0.60)} \right]$

2. $E = 0.36 - 0.02569 \ln \left[\frac{192.5}{(0.70)^2(0.60)} \right]$

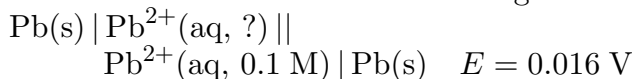
3. $E = 0.36 + 0.01285 \ln \left[\frac{1.9}{(0.70)^2(0.60)} \right]$

4. $E = 0.36 + 0.01285 \ln \left[\frac{192.5}{(0.70)^2(0.60)} \right]$

5. $E = 0.36 - 0.01285 \ln \left[\frac{1.90}{(0.70)^2(0.60)} \right]$

015 10.0 points

A concentration cell consists of the same redox couples at the anode and the cathode, with different concentrations of the ions in the respective compartments. Find the unknown concentration for the following cell.



1. 0.0122244

2. 0.0180409

3. 0.00101256

4. 0.0287804

5. 0.0142836

6. 0.00238391

7. 0.000368075

8. 0.00380303

9. 0.0006861

10. 0.00043008

Answer in units of M.

016 10.0 points

What is ratio of $[\text{Co}^{2+}]$ to $[\text{Ni}^{2+}]$ when a battery built from the two half reactions



reaches equilibrium?

1. 3.0

2. 0.10

3. 10.0

4. 0.30

017 10.0 points

If E° for the disproportionation of $\text{Cu}^+(\text{aq})$ to $\text{Cu}^{2+}(\text{aq})$ and $\text{Cu}(\text{s})$ is $+0.37 \text{ V}$ at 25°C , calculate the equilibrium constant for the reaction.

1. 1.8×10^6 2. 2.4×10^2 3. 5.7×10^{18} 4. 1.3×10^3 5. 3.2×10^{12}

018 10.0 points

You turn on a flashlight containing brand new NiCad batteries and keep it lit for a minute or two. Which of the following can be considered TRUE regarding the chemical state of these batteries?

- I. ΔG for the battery reaction is negative.
- II. $E_{\text{cell}} > 0$.
- III. The batteries are at equilibrium.
- IV. E_{cell} is substantially decreasing during this time.

1. All

2. III only

3. All but IV

4. I and II only

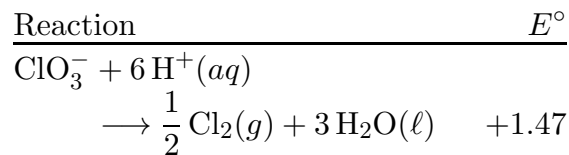
5. All but III

6. Maybe IV and I

7. II and IV only

019 10.0 points

What is ΔG° for the half reaction below?

1. $-1,418 \text{ kJ} \cdot \text{mol}^{-1}$ 2. $-709 \text{ kJ} \cdot \text{mol}^{-1}$ 3. $194,000 \text{ kJ} \cdot \text{mol}^{-1}$ 4. $194 \text{ kJ} \cdot \text{mol}^{-1}$

020 10.0 points

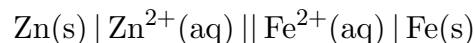
For the reduction of Cu^{2+} by Zn , $\Delta G^\circ = -212 \text{ kJ/mol}$ and $E^\circ = +1.10 \text{ V}$. If the coefficients in the chemical equation for this reaction are multiplied by 2, $\Delta G^\circ = -424 \text{ kJ/mol}$. This means $E^\circ = +2.20 \text{ V}$.

1. True

2. False

021 10.0 points

Consider the cell

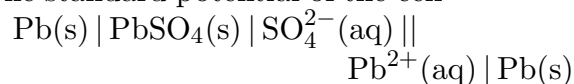


at standard conditions. Calculate the value of ΔG_r° for the reaction that occurs when current is drawn from this cell.

1. $+62 \text{ kJ} \cdot \text{mol}^{-1}$ 2. $-31 \text{ kJ} \cdot \text{mol}^{-1}$ 3. $-230 \text{ kJ} \cdot \text{mol}^{-1}$ 4. $+230 \text{ kJ} \cdot \text{mol}^{-1}$ 5. $-62 \text{ kJ} \cdot \text{mol}^{-1}$

022 10.0 points

The standard potential of the cell

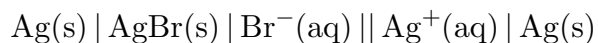


is +0.23 V at 25°C. Calculate the equilibrium constant for the reaction of 1 M $\text{Pb}^{2+}(\text{aq})$ with 1 M $\text{SO}_4^{2-}(\text{aq})$.

1. 6.0×10^7
2. 7.7×10^3
3. 3.7×10^{16}
4. 8.0×10^{17}
5. 1.7×10^{-8}

023 10.0 points

The standard voltage of the cell

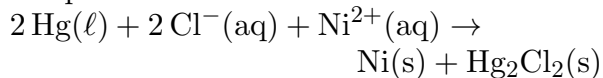


is +0.73 V at 25°C. Calculate the equilibrium constant for the cell reaction.

1. 5.1×10^{14}
2. 4.6×10^{-13}
3. 2.2×10^{12}
4. 2.0×10^{-15}
5. 3.9×10^{-29}

024 10.0 points

The equilibrium constant for the reaction



is 5.6×10^{-20} at 25°C. Calculate the value of E° for a cell utilizing this reaction.

1. - 1.14 V
2. + 1.14 V
3. + 0.57 V
4. - 0.57 V
5. - 0.25 V