

McCord CH302  
50375 / 50380

# Exam 2

Spring 2017

Please also refer to the Periodic Table handout included with your exam bundle.  
Many conversion factors and physical constants are available there.

acid	formula	$K_a$
acetic	CH <sub>3</sub> COOH	$1.8 \times 10^{-5}$
benzoic	C <sub>6</sub> H <sub>5</sub> COOH	$6.4 \times 10^{-5}$
butanoic	C <sub>3</sub> H <sub>7</sub> COOH	$1.5 \times 10^{-5}$
chloroacetic	CClH <sub>2</sub> COOH	$1.4 \times 10^{-3}$
chlorous	HClO <sub>2</sub>	$1.2 \times 10^{-2}$
hydrocyanic	HCN	$4.9 \times 10^{-10}$
hypobromous	HBrO	$2.8 \times 10^{-9}$
hypochlorous	HClO	$3.5 \times 10^{-8}$
nitrous	HNO <sub>2</sub>	$5.6 \times 10^{-4}$

base	formula	$K_b$
ammonia	NH <sub>3</sub>	$1.8 \times 10^{-5}$
aniline	C <sub>6</sub> H <sub>5</sub> NH <sub>2</sub>	$4.3 \times 10^{-10}$
ethylamine	C <sub>2</sub> H <sub>5</sub> NH <sub>2</sub>	$5.6 \times 10^{-4}$
hydrazine	N <sub>2</sub> H <sub>4</sub>	$1.7 \times 10^{-6}$
methylamine	CH <sub>3</sub> NH <sub>2</sub>	$4.4 \times 10^{-4}$
propylamine	C <sub>3</sub> H <sub>7</sub> NH <sub>2</sub>	$3.7 \times 10^{-4}$
triethylamine	(C <sub>2</sub> H <sub>5</sub> ) <sub>3</sub> N	$5.6 \times 10^{-4}$
trimethylamine	(CH <sub>3</sub> ) <sub>3</sub> N	$6.5 \times 10^{-5}$
pyridine	C <sub>5</sub> H <sub>5</sub> N	$1.8 \times 10^{-9}$

polyprotic acid	formula	$K_a$
phosphoric	H <sub>3</sub> PO <sub>4</sub>	1) $7.5 \times 10^{-3}$
		2) $6.2 \times 10^{-8}$
		3) $4.8 \times 10^{-13}$
sulfurous	H <sub>2</sub> SO <sub>3</sub>	1) $1.5 \times 10^{-2}$
		2) $1.0 \times 10^{-7}$

$$K_w = 1.0 \times 10^{-14}$$

$$R = 8.314 \text{ J/mol K}$$

$$R = 0.08206 \text{ L atm / mol K}$$

$$1 \text{ gal} = 3.785 \text{ L}$$

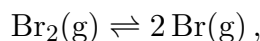
**NOTE:** Please keep your Exam copy intact (all pages still stapled).  
You must turn in your exam copy, bubble sheet, and scratch paper.

This print-out should have 30 questions. Multiple-choice questions may continue on the next column or page – find all choices before answering.

---

**001 4.0 points**

For the reaction



$\Delta G_{\text{r}}^{\circ} = +161.69 \text{ kJ} \cdot \text{mol}^{-1}$  at  $25^{\circ}\text{C}$ . What is the value of  $K_{\text{p}}$  for this reaction?

- $1.83 \times 10^{-30}$
- 0.0378
- $4.54 \times 10^{-29}$
- $1.12 \times 10^{-27}$

---

**002 2.0 points**

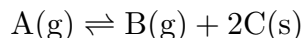
The conjugate acid of  $\text{HPO}_4^{2-}$  is

- $\text{H}_2\text{PO}_4^-$
- $\text{H}_3\text{PO}_4$
- $\text{HPO}_4^{2-}$
- $\text{PO}_4^{3-}$
- $\text{H}^+$

---

**003 3.0 points**

Given the hypothetical reaction below, predict what will happen when 1.0 mol of B(g) and 2.0 mol of C(s) are placed into an evacuated container.

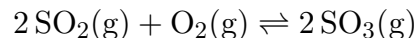


- $\Delta G^{\circ}$  will decrease until  $\Delta G^{\circ} = 0$ .
- Nothing; the products are already formed, so no reaction occurs.
- Q will increase until  $Q = K$ .
- Q will decrease until  $Q = K$ .

---

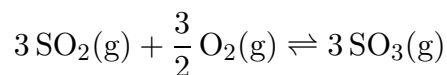
**004 4.0 points**

The equilibrium constant for the reaction



has the value  $K = 4.2 \times 10^{24}$  at 300 K.

Find the value of  $K$  for the reaction



at the same temperature.

- $8.6 \times 10^{36}$
- $2.0 \times 10^{12}$
- $7.0 \times 10^{23}$
- $7.4 \times 10^{73}$
- $1.8 \times 10^{49}$

---

**005 3.0 points**

What is the pH of a 0.047 M solution of HCN?

- 4.82
- 9.31
- 4.65
- 5.19
- 5.32
- 6.33

---

**006 3.0 points**

An olympic sized swimming pool has a volume of about 700 thousand gallons. Let's assume the pool is unbuffered and currently has a pH of 9.33 which is a bit high for swimming. Calculate how many gallons of muratic acid (aka: 10 M hydrochloric acid) will it take to adjust the pool back to neutrality?

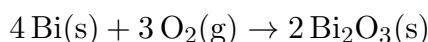
- 3.0 gal

- 1.5 gal
- 1.0 gal
- 2.0 gal
- 2.5 gal
- $\gg 5$  gal

---

**007 3.0 points**

Write the reaction quotient for



- $Q = P_{\text{O}_2}^3$
- $Q = \frac{2 P_{\text{Bi}_2\text{O}_3}}{4 P_{\text{Bi}}^3 P_{\text{O}_2}^3}$
- $Q = \frac{P_{\text{Bi}_2\text{O}_3}^2}{P_{\text{Bi}}^4 P_{\text{O}_2}^3}$
- $Q = \frac{P_{\text{Bi}_2\text{O}_3}^2}{P_{\text{Bi}}^4}$
- $Q = \frac{1}{P_{\text{O}_2}^3}$

---

**008 3.0 points**

Bromothymol blue is an important indicator because it changes color around a neutral pH. It is yellow when protonated and blue when deprotonated. The full range of color change occurs between  $\text{pH} = 5.5$  and  $\text{pH} = 7.5$ .

A few drops of bromothymol blue are placed in an unknown solution. The solution turns pure yellow. What is the BEST conclusion to make about this sample?

- The solution is within a range of  $\text{pH} = 5.5$  to  $\text{pH} = 6.5$
- The solution is within a range of  $\text{pH} = 5.5$  to  $\text{pH} = 7.5$
- The solution has a  $\text{pH}$  less than 5.5
- The solution has a  $\text{pH} = 7$

- The solution must be extremely acidic
- The solution must be extremely basic
- The solution has a  $\text{pH}$  greater than 7.5

---

**009 3.0 points**

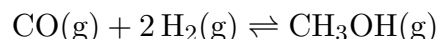
A reaction is at equilibrium and then the entire mixture is compressed to half the original volume. As expected, the pressure initially doubles, but then falls slightly to a lower pressure. Which of the five generic reactions listed is the only one capable of this response?

- $\text{B}(g) \rightleftharpoons \text{Z}(g)$
- $\text{A}(g) + \text{C}(g) \rightleftharpoons 3\text{D}(g)$
- $\text{A}(g) + \text{B}(g) \rightleftharpoons 2\text{C}(g)$
- $2\text{W}(g) + \text{X}(g) \rightleftharpoons \text{Y}(g) + 2\text{Z}(g)$
- $\text{C}(g) + \text{J}(s) \rightleftharpoons \text{Y}(g)$

---

**010 3.0 points**

Consider the reaction



At room temperature,  $K$  is approximately  $2 \times 10^4$ , but at a higher temperature  $K$  is substantially smaller. Which of the following is true?

- The reaction is endothermic.
- At the higher temperature, more  $\text{CH}_3\text{OH}(g)$  is produced.
- The reaction is exothermic.
- The reaction becomes spontaneous at higher temperatures.

---

**011 4.0 points**

What is the concentration of  $\text{H}_3\text{O}^+$  ions in a 0.10 M solution of  $\text{Ba}(\text{OH})_2$  at  $25^\circ\text{C}$ ?

- $2.5 \times 10^{-13} \text{ M}$

2.  $5.0 \times 10^{-14}$  M
3. None of the other answers is correct.
4.  $1.0 \times 10^{-13}$  M
5.  $1.0 \times 10^{-1}$  M

---

**012 4.0 points**

A 500 mL sample of 0.50 M hypochlorous acid, HOCl, was titrated to the equivalence point with 0.50 M NaOH solution. What is the pH of the solution at the equivalence point?

1. 3.57
2. 10.43
3. 3.20
4. 10.82
5. 7.00

---

**013 4.0 points**

List the the following solution species in order of increasing base strength (weakest base to strongest base).



1.  $(\text{C}_2\text{H}_5)_3\text{N}$   $\text{BrO}^-$   $\text{N}_2\text{H}_4$   $\text{CN}^-$
2.  $\text{CN}^-$   $\text{N}_2\text{H}_4$   $\text{BrO}^-$   $(\text{C}_2\text{H}_5)_3\text{N}$
3.  $(\text{C}_2\text{H}_5)_3\text{N}$   $\text{CN}^-$   $\text{BrO}^-$   $\text{N}_2\text{H}_4$
4.  $\text{N}_2\text{H}_4$   $\text{BrO}^-$   $\text{CN}^-$   $(\text{C}_2\text{H}_5)_3\text{N}$
5.  $(\text{C}_2\text{H}_5)_3\text{N}$   $\text{BrO}^-$   $\text{CN}^-$   $\text{N}_2\text{H}_4$
6.  $\text{N}_2\text{H}_4$   $\text{CN}^-$   $\text{BrO}^-$   $(\text{C}_2\text{H}_5)_3\text{N}$
7.  $\text{BrO}^-$   $(\text{C}_2\text{H}_5)_3\text{N}$   $\text{N}_2\text{H}_4$   $\text{CN}^-$
8.  $\text{CN}^-$   $\text{N}_2\text{H}_4$   $(\text{C}_2\text{H}_5)_3\text{N}$   $\text{BrO}^-$

---

**014 4.0 points**

Chlorinating the terminal carbon of acetic acid makes the molecule more acidic. What is the pH of a 0.020 M chloroacetic acid ( $\text{CClH}_2\text{COOH}$ ) solution?

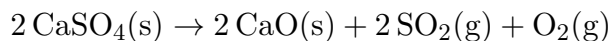
1. 3.11
2. 2.33
3. 2.28
4. 2.80
5. 12.22
6. 1.70

---

**015 4.0 points**

Note: The  $K_p$  given in this problem is based on bar, not atm. Work the problem in bar.

Consider the following decomposition reaction at 700 K.



If  $K_p = 0.032$  at this temperature, what will be the equilibrium overall pressure starting from pure  $\text{CaSO}_4(\text{s})$ ?

1. 0.40 bar
2. 0.20 bar
3. 0.60 bar
4. 0.011 bar
5. 0.22 bar

---

**016 3.0 points**

You have a 1.5 M solution of methylamine,  $\text{CH}_3\text{NH}_2$ . You expect the concentration of methylammonium ion,  $\text{CH}_3\text{NH}_3^+$  in this solution to be

1. Slightly greater than 1.5 M
2. Much greater than 1.5 M
3. 1.5 M

4. Much lower than 1.5 M

5. Slightly lower than 1.5 M

---

**017 3.0 points**

Which response identifies the statements true of buffer solutions?

- I) A buffer solution could consist of equal concentrations of ammonia and ammonium bromide.
- II) A buffer solution could consist of equal concentrations of perchloric acid ( $\text{HClO}_4$ ) and sodium perchlorate.
- III) A buffer solution will change only slightly in pH upon addition of small amounts of acid or base.
- IV) In a buffer solution containing benzoic acid ( $\text{C}_6\text{H}_5\text{COOH}$ ) and sodium benzoate ( $\text{NaC}_6\text{H}_5\text{COO}$ ) the species that reacts with added hydroxide ion is the benzoate ion.

1. II, III

2. Another combination

3. I, III

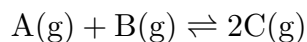
4. I, IV

5. II, III, IV

---

**018 4.0 points**

Consider the following reaction



where equal partial pressures of A and B gases are put into a reaction vessel. After equilibrium is established, it is found that 80% of A and B have reacted. What is the value for  $K$  for this reaction?

1. 4

2. 16

3. 25

4. 80

5. 36

6. 1

7. 64

---

**019 4.0 points**

Which of the following chemical species would you expect to be the predominant form of sulfurous acid in a solution with a pH of 9 ?

1.  $\text{HSO}_3^-$

2.  $\text{H}_3\text{SO}_3^+$

3.  $\text{H}_2\text{SO}_3$

4.  $\text{SO}_3^{2-}$

---

**020 3.0 points**

Solution A has a  $\text{H}^+$  concentration of  $10^{-5}$  M. Solution B has a  $\text{H}^+$  concentration of  $10^{-3}$  M. Which one has a lower pH, and which one contains more  $\text{OH}^-$  ions?

1. B; B

2. B; A

3. A; B

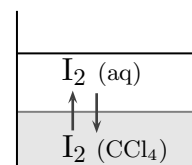
4. A; A

---

**021 4.0 points**

A special type of equilibrium is between two different solvents for the same solute. In this case the solute is iodine ( $\text{I}_2$ ). Iodine is more soluble in carbon tetrachloride ( $\text{CCl}_4$ ) than in water.

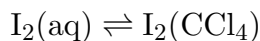
Water and  $\text{CCl}_4$  are immiscible and separate into 2 distinct liquid phases with the less dense water on top (see figure).



The  $\text{I}_2$  will reach equilibrium across the phase

boundary and the equilibrium constant,  $K_c$  can be determined.

The iodine is initially only in the aqueous solution at a concentration of  $1.2 \times 10^{-3}$  M. After the  $\text{CCl}_4$  is added, and the system reaches equilibrium, the concentration in the aqueous phase has dropped to  $1.6 \times 10^{-5}$  M. Calculate the equilibrium constant,  $K_c$  for this partitioning between the two phases. Specifically for



- $7.4 \times 10^1$
- $1.4 \times 10^2$
- $9.3 \times 10^1$
- $6.2 \times 10^4$
- $1.4 \times 10^{-2}$

---

**022 3.0 points**

As a reaction proceeds to the equilibrium state at constant temperature, which of the following statements is correct?

- The value of  $\Delta G^\circ$  is changing until it equals zero.
- The value of  $Q$  is changing and headed towards the minimum value possible.
- The overall free energy of the system is decreasing until a minimum is reached.
- The reaction will proceed such that the activities of the products equals the activities of the reactants.
- The value of  $K$  will change until it equals one.

---

**023 3.0 points**

You mix 10 mL of 3M LiOH with 10 mL of 3M  $\text{HNO}_2$ . The final solution will be

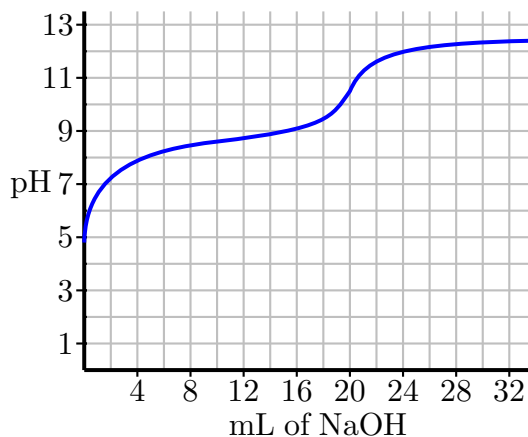
- Neutral

- Acidic
- Basic

---

**024 (part 1 of 3) 3.0 points**

A sample of 100 mL of a weak acid (HA) solution was titrated with 0.065 M NaOH. The pH curve for this titration is shown.



What is the concentration of the original weak acid solution (the 100 mL) ?

- 0.33 M
- 0.065 M
- 0.013 M
- 0.016 M
- 0.010 M

---

**025 (part 2 of 3) 2.0 points**

What is the pH at the equivalence point of this titration?

- 7.00
- 8.6
- 10.6
- 9.2
- 12.1

---

**026 (part 3 of 3) 3.0 points**

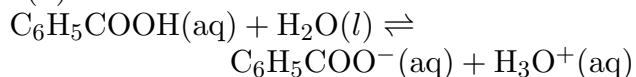
Which of these acids and bases could be the solution that was titrated?

1. hypochlorous acid
2. hypoiodous acid
3. chlorous acid
4. hypobromous acid
5. nitrous acid
6. butanoic acid

---

**027 3.0 points**

In the following equation, water is acting as a(n)



1. Neither
2. Base
3. Acid

---

**028 4.0 points**

A buffer was prepared by mixing 0.40 moles of methylamine ( $\text{CH}_3\text{NH}_2$ ) and 0.40 moles of methylammonium chloride ( $\text{CH}_3\text{NH}_3\text{Cl}$ ) to form an aqueous solution with a total volume of 800 mL. After that solution came to equilibrium, 0.10 moles of HBr was added to the buffer solution. What is the new pH of the solution?

1. 5.47
2. 10.64
3. 3.13
4. 10.87
5. 3.36

6. 10.42

7. 3.58

---

**029 3.0 points**

The  $\Delta H^\circ$  for the autoionization of water is 55.7 kJ/mol. Which of the following is/are true regarding the autoionization of pure water?

- I) The concentration of  $\text{H}_3\text{O}^+$  will be greater at  $37^\circ\text{C}$
- II)  $[\text{OH}^-] = [\text{H}_3\text{O}^+]$  at all temperatures
- III)  $K_w$  is equal to  $1 \times 10^{-14}$  at all temperatures
- IV) The concentration of  $\text{H}_3\text{O}^+$  will be less at  $37^\circ\text{C}$

1. II and IV
2. II only
3. I and II
4. III only
5. I, II, and III
6. II, II, and IV

---

**030 4.0 points**

What is the percent ionization for a 0.50 M solution of trimethylamine,  $(\text{CH}_3)_3\text{N}$ ?

1. 100%
2. 4.6%
3. 0.57%
4. 1.1%
5. 2.1%
6. 1.8%